

How Do I Play A Recorder and Read Music?


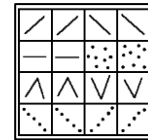
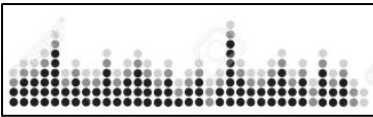
End of Topic Quiz: Autumn 2



1) Circle the recorder that would play the **note G** (below).



2) Which of these is a **stave**? (Circle one)



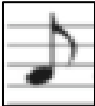



3) What is a **stave** used for? (Tick one)

- a) A **stave** tells musicians how loud and soft to play a tune.
- b) A **stave** tells musicians the timing of a tune.
- c) Musicians can read musical notes on a stave in order to play a tune.

4) Label the notes **A**, **B** and **G**



5) Match the **notes** to their length and name.
(The first one has been done for you)

<div>quaver</div>		<div>1 beat</div>
<div>crochet</div>		<div>1/2 beat</div>
<div>minim</div>		<div>1 beat</div>
<div>crochet rest</div>		<div>2 beats</div>